

Name _____

Date _____

Math Activity: Math Challenge 4















✓ What I Practiced

What helped you solve the number challenges?

- Tried different numbers
 Other:
- Used logic and number sense
- Looked for patterns and relationships

⚙️ How I Solved It

Solve the puzzle.
Explain your thinking.

 +  +  = 70	 = <input style="width: 50px; height: 25px;" type="text"/>
 -  = 20	 = <input style="width: 50px; height: 25px;" type="text"/>
 +  = 45	 = <input style="width: 50px; height: 25px;" type="text"/>
 +  x  = <input style="width: 50px; height: 25px;" type="text"/>	 = <input style="width: 50px; height: 25px;" type="text"/>

📌 Next Steps

What was challenging about these puzzles?

What will help you do better next time?

- Start with simpler equations
 Other:
- Label the parts I know